

Good morning everybody,

I hope you are enjoying the new packs and that you are now back into the swing of working from home. Thank you to those of you who are sending through photographs and sharing your completed work with us. We have been really impressed with the quality of work. If you would like to feature in this week's praise assembly, then please send us a picture of your home achievements by the end of the day so we can forward it on to Mrs Pennington.

Here are your answers for Friday 5th June

Maths:



Please ensure your child has completed the maths quiz (sent Friday) by the end of the day, so we can provide appropriate feedback.

Friday 5th June - Reading



Make a list of similarities and differences between Grandad's house and the island. Where would you prefer to live and why?


Similarities:

- *Both are places that Syd has visited.*
- *Both are places where Grandad has lived/live.*
- *Items from the Island are also found at Grandad's house e.g. Orangutan, Turtle and suitcase etc*
- *Grandad's house has boat themed (nautical) objects and the Island is out at sea.*

Differences:

- *The island is mysterious.*
- *The Island has a jungle.*
- *The Island is larger than Grandad's house.*
- *The island has a shack and not a house.*

Accept any relevant similarities and differences. Please do share your answers about which one you would prefer to live in and why.

Day of week	Core	Foundation
Monday	Maths –Fact families Reading- Dragon Keeper Application Vocabulary Questions Writing – Use conjunctions to extend sentences	Thematic - Compare rural and urban areas 

Monday 8th June - Maths – Fact families





Today, we are looking at fact families (addition and subtraction facts to 20)


Follow the link and watch the video all about fact families <https://vimeo.com/413876516>

Fact families – addition and subtraction bonds to 20

- 1 What calculations are represented?
The first one has been done for you.

a) 
 $15 + 5 = 20$

b) 
 + =

c) 
 + =

- d) How many other number bonds to 20 can you make using counters and ten frames?
- _____
- _____

- 2 Complete the fact family.

a) $15 + 2 = 17$
 $17 = 15 + 2$
 $2 + 15 = \square$

= +

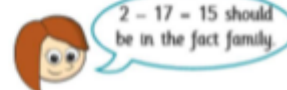
$17 - 15 = \square$

= -

- =

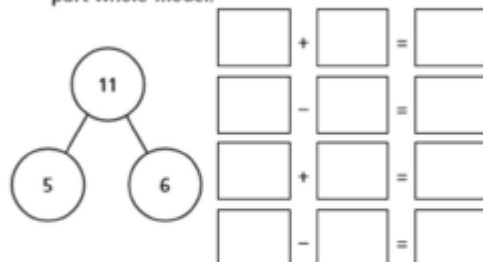
= -

- b)



Explain why Rosie is wrong.

- 3 Complete the number sentences for the part-whole model.



Are there any other number sentences in this fact family?

Talk about it with a partner.

Reading:

Read the Dragon keeper letter and discuss the meaning of words that are new to you with an adult.

Vocabulary

1. How does the author describe the dragon's claws?
2. "I am always prepared to take on a dragon".

Find the word in the above sentence which means 'ready.'

3. Look at the paragraph beginning "Another reason..." Find and copy one word that means 'pick'.

Monday 8th June - Writing

Below is a picture of where Fantastic Mr Fox lives. Today we are going to use 'because, but, so' to extend a sentence about his home. The sentence is:

Fantastic Mr Fox lives under the tree...

Complete the sentences in your book.

1. Fantastic Mr Fox lives under the tree because
2. Fantastic Mr Fox lives under the tree but
3. Fantastic Mr Fox lives under the tree so



Monday 8th June - Thematic

Today we are going to be comparing urban and rural areas.

urban



a city

rural



**countryside located outside
of a town or city**



Watch the two videos of drones going over an urban and a rural area.

Urban (Birmingham) <https://www.youtube.com/watch?v=TOxrM404lc4>

Rural (Shropshire) <https://www.youtube.com/watch?v=KGhu0tFSXqY>

Can you list some similarities and differences between the two areas? Top tip: Think carefully about the landmarks that you can see.

