

Good morning all,

Well done to those of you who are keeping up with a good routine! Today, you will need to complete the work labelled Tuesday in your packs.

Here are yesterday's answers:

Comprehension

1. A habitat is a place where a plant or animal lives.
2. The equator divides the earth into the northern hemisphere and the southern hemisphere. Countries closest to the equator are hot.
3. An urban area is somewhere that has been built on by humans. Lots of people live in an urban area.

English

1. Circle the appropriate adjective for these sentences.

The (fast / happy / smooth) car raced down the motorway.

The (hard / spooky / tiny) castle was in the middle of a forest.

The (blue / striped / massive) tiger chased its prey.

2. Underline the expanded noun phrases in these sentences.

Jack took his old, useless cow to the busy market to sell.

He was given some magic beans which turned into a huge beanstalk.

The tall, terrifying giant chased the small boy down the beanstalk.



1 Match the part to the whole.

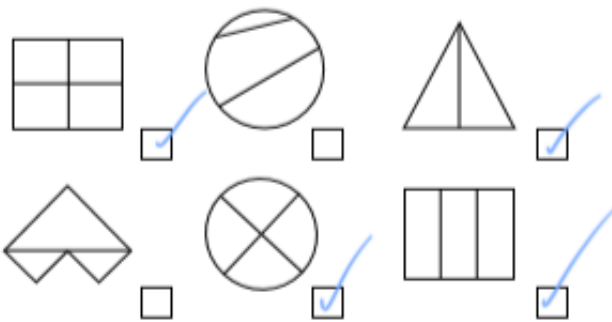
4 Tick the pizza that has been split into equal parts.



5 How do you know the loaf of bread is not in equal parts?



6 Tick the shapes that show equal parts.

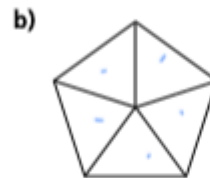


sday

2 Complete the sentences.



There are equal parts.



There are equal parts.

3 Complete the sentences.



There are equal groups.

Each group has cakes.

Comprehension – Read the text 'Habitats'. Answer the Retrieval questions (4-7)

Retrieval

4. What is the biggest tropical rainforest in the world?

5. Name 2 animals that live in an ocean habitat.

6. What is an ocean?

7. Describe the weather in a tropical rainforest.

English activity:

Focus: Word class

1. Join the word class to its description.

noun

an object, place or person

adjective

an action

verb

describes a verb

adverb

describes a noun

2. Tick the sentence which has two nouns.

My brother is nine.

I ran forwards.

The park is my favourite place.

Maths

Maths Starter:

$2 \times 9 =$

$18 \div 2 =$

$21 \div \underline{\quad} = 3$

Main Activity:

Recognise a half

1 Complete the sentences.

The whole cake is split into

equal parts.



Each part is worth a _____.

This can be written as

2 Tick the diagrams that have one half shaded.






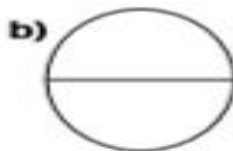




3 Is $\frac{1}{2}$ of each shape shaded? How do you know?



4 Colour $\frac{1}{2}$ of each shape.



5 Colour $\frac{1}{2}$ of each square.

Show four different ways.



Up on an extra: Miss Sutton has shared a list of non-screen activities that the children can do at home. See if there's any you might like to try.

<https://medium.com/pobble/25-more-simple-and-fun-non-screen-activities-that-children-can-do-at-home-f74550c00a84>