

Good morning everyone.

It has been lovely to see all that you are achieving whilst you are staying at home. Please keep sending in your photos as I love to see what you are all doing. We have also created a maths quiz on google forms to be completed independently. Follow the link and have a go! <https://forms.gle/FjVSx3aG1sRugdkf9>

Here are yesterday's answers:

Comprehension

- 4. The biggest tropical rainforest in the world is the Amazon.
- 5. Any of the following 2 animals – dolphins, corals, starfish, turtles
- 6. An ocean is a very large area of saltwater.
- 7. The weather in a tropical rainforest is hot and rainy.

English activity:

1. Complete the sentence to turn these exclamatory phrases into exclamations by adding a verb.

What lovely hair	that is!
What a sharp axe	you have!
How wonderful	the woodcutter had!
What a beautiful picture	you look!

3. Match these sentences to the correct endings.

What giant teeth	you have!
How amazing	you live?
Where do	doesn't she?
She has two brothers	she is at skating!

Starter:

$12 \div 4 = 3$	$16 \div 4 = 4$	$20 \div 5 = 4$
-----------------	-----------------	-----------------

Main Activity: *Fraction of amounts*

4 Find $\frac{1}{2}$ of each number.

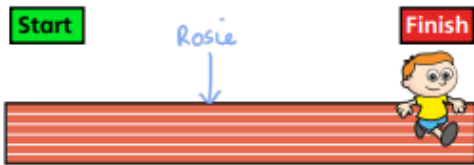
Use the arrays to help you.

a)  $\frac{1}{2}$ of 10 =

b)  $\frac{1}{2}$ of 16 =

c)  $\frac{1}{2}$ of 20 =

5 Ron has run 20 m.



Rosie has run half that distance.

a) Draw an arrow on the running track to show where Rosie is.

a) How far has Rosie run? m

6 Here are half of Annie's sweets.

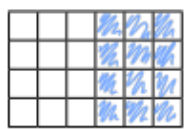


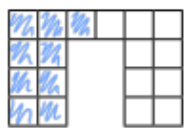
How many sweets does Annie have in total?

Compare answers with a partner.

7 Colour $\frac{1}{2}$ of each shape.

Use the shapes to help you complete the number sentences.

a)  $\frac{1}{2}$ of =

b)  $\frac{1}{2}$ of =

8 Complete the number sentences.

$\frac{1}{2}$ of = 10 $\frac{1}{2}$ of = 7

Thursday

Maths Starter:

$12 + 4 =$	$12 + 14 =$	$12 + 24 =$
------------	-------------	-------------

Main Activity:

Recognise a quarter

1 Use the words to complete the sentences.

quarter equal

The shape has been split into

4 _____ parts.

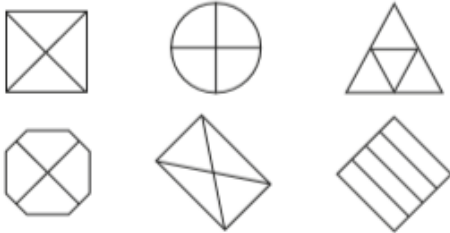
One of the 4 equal parts is called

a _____.

This can be written as $\frac{1}{4}$



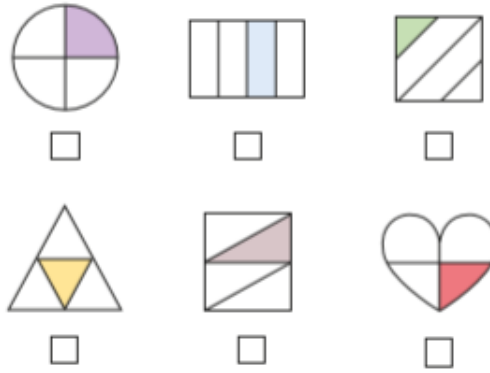
2 Colour $\frac{1}{4}$ of each shape.



Does it matter which quarter you colour?

Talk to a partner.

3 Tick the shapes that have $\frac{1}{4}$ shaded.



Talk about your answers with a partner.

4



This shape has $\frac{1}{4}$ shaded



Do you agree with Whitney? _____

Why?

English activity:

Focus: sentence types

1. Tick the box to show whether these sentences are commands, exclamations or statements.

	Command	Exclamation	Statement
Get in the car now.	<input type="checkbox"/>	<input type="checkbox"/>	<input type="checkbox"/>
What a hard-working child you have!	<input type="checkbox"/>	<input type="checkbox"/>	<input type="checkbox"/>
Put the slices of bread into the toaster.	<input type="checkbox"/>	<input type="checkbox"/>	<input type="checkbox"/>
He heard a noise.	<input type="checkbox"/>	<input type="checkbox"/>	<input type="checkbox"/>
How lovely you look today!	<input type="checkbox"/>	<input type="checkbox"/>	<input type="checkbox"/>

2. Match the sentences to the correct punctuation.

It took him thirty minutes to walk to school

?

What a long time it took to walk to school

.

How long does it take you to walk to school

!

3. For each of these statements, create a question using the same words.

e.g. He is playing football. → Is he playing football?

a) Dinner is at 5pm.

b) They were walking quickly.

c) James is coming to the party.

Comprehension

Traction Man

DIFFICULTY: 🏆🏆

Traction Man and Scrubbing Brush were outside in the garden. It was a lovely summer's day. The sun was shining and the birds were singing in the trees. Scrubbing Brush was so happy to be outside that he was running round and around on the green grass. Traction Man was wearing his action trousers, camouflage vest and his brown bandana. He was crawling slowly in search of an insect to trap in his secret trap.

While Traction Man was so busy watching the little insects, he didn't notice that one of his arch enemies was coming towards him. Soon, it was too late - Evil Professor Spade was in front of him. His sharp, metal blade was glinting in the sunlight. He screeched with delight when he realised that he had trapped the famous Traction Man! Traction Man could hear screaming coming from the sandpit. The wicked Professor had kidnapped Mr and Mrs Potato Head! Traction man tried to get up from the path but he was stuck. Meanwhile, Professor Spade was getting closer and closer.

Suddenly, Traction Man heard a strange noise. "Arf! Arf! Arf!" Traction Man had forgotten about his trusty sidekick! It was Scrubbing Brush and he was running down the path. Bang! Crash! Wallop! He ran straight into Professor Spade who instantly fell to the floor.

Quickly, Traction Man jumped up and into the golden sandpit where the Potato Heads had been held captive. In a flash, he had untied the Potato Heads and put them back on the path. "How can we ever thank you Traction Man?" they said.

"Don't thank me," said Traction Man, "Thank Scrubbing Brush. He saved the day."



1. Choose one word that means the same as 'in a flash'.

- a) brightly b) quickly
c) next d) slowly

2. 'His sharp, metal blade was glinting in the sunlight'.

Find and copy one word in the sentence that means the same as 'shining'.

3. Write down 3 synonyms for the word 'strange'.

-Remember a synonym is a word that has the same or similar meaning.